







Non Standard Units

Count the blocks under each animal and write the number in the box.

 <table border="1"><tr><td>1</td><td>2</td><td>3</td><td>4</td><td>5</td><td>6</td><td>7</td><td>8</td></tr></table> <input type="text"/>	1	2	3	4	5	6	7	8	 <table border="1"><tr><td>1</td><td>2</td><td>3</td><td>4</td><td>5</td><td>6</td><td>7</td><td>8</td></tr></table> <input type="text"/>	1	2	3	4	5	6	7	8
1	2	3	4	5	6	7	8										
1	2	3	4	5	6	7	8										

 <table border="1"><tr><td>1</td><td>2</td><td>3</td><td>4</td><td>5</td><td>6</td><td>7</td><td>8</td></tr></table> <input type="text"/>	1	2	3	4	5	6	7	8	 <table border="1"><tr><td>1</td><td>2</td><td>3</td><td>4</td><td>5</td><td>6</td><td>7</td><td>8</td></tr></table> <input type="text"/>	1	2	3	4	5	6	7	8
1	2	3	4	5	6	7	8										
1	2	3	4	5	6	7	8										

 <table border="1"><tr><td>1</td><td>2</td><td>3</td><td>4</td><td>5</td><td>6</td><td>7</td><td>8</td></tr></table> <input type="text"/>	1	2	3	4	5	6	7	8	 <table border="1"><tr><td>1</td><td>2</td><td>3</td><td>4</td><td>5</td><td>6</td><td>7</td><td>8</td></tr></table> <input type="text"/>	1	2	3	4	5	6	7	8
1	2	3	4	5	6	7	8										
1	2	3	4	5	6	7	8										

