



# Subtracting with Number Lines


Draw the hops on the number line and solve the math sentence. The animals show where to start!




← 0 1 2 3 4 5 6 7 8 9 10 →

$$\boxed{10} - \boxed{5} = \boxed{\phantom{00}}$$


← 0 1 2 3 4 5 6 7 8 9 10 →

$$\boxed{9} - \boxed{3} = \boxed{\phantom{00}}$$


← 0 1 2 3 4 5 6 7 8 9 10 →

$$\boxed{6} - \boxed{1} = \boxed{\phantom{00}}$$


← 0 1 2 3 4 5 6 7 8 9 10 →

$$\boxed{8} - \boxed{4} = \boxed{\phantom{00}}$$


# Subtracting with Number Lines

Draw the hops on the number line and solve the math sentence. The animals show where to start!

10 - 5 = 5

9 - 3 = 6

6 - 1 = 5

8 - 4 = 4

